




Determine which choice best describes the coins in the order shown.

Answers



- A. penny, quarter, nickel, dime
- B. nickel, penny, dime, quarter
- C. nickel, penny, quarter, dime
- D. penny, nickel, quarter, dime

1. \_\_\_\_\_



- A. quarter, nickel, penny, dime
- B. dime, penny, quarter, nickel
- C. quarter, dime, penny, nickel
- D. dime, nickel, quarter, penny

2. \_\_\_\_\_

3. \_\_\_\_\_



- A. penny, dime, nickel, quarter
- B. nickel, penny, quarter, dime
- C. penny, nickel, dime, quarter
- D. nickel, quarter, penny, dime

4. \_\_\_\_\_

5. \_\_\_\_\_

6. \_\_\_\_\_



- A. penny, quarter, dime, nickel
- B. nickel, dime, quarter, penny
- C. quarter, nickel, dime, penny
- D. nickel, penny, quarter, dime

7. \_\_\_\_\_



- A. nickel, dime, quarter, penny
- B. penny, dime, nickel, quarter
- C. dime, quarter, nickel, penny
- D. penny, quarter, dime, nickel


8. \_\_\_\_\_



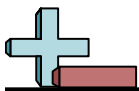
- A. nickel, dime, penny, quarter
- B. nickel, quarter, dime, penny
- C. dime, quarter, penny, nickel
- D. nickel, dime, quarter, penny



- A. quarter, dime, nickel, penny
- B. dime, nickel, quarter, penny
- C. penny, dime, nickel, quarter
- D. penny, dime, quarter, nickel



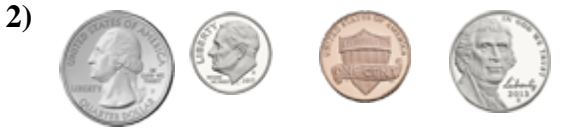
- A. quarter, penny, nickel, dime
- B. quarter, dime, penny, nickel
- C. quarter, nickel, penny, dime
- D. penny, nickel, dime, quarter



Determine which choice best describes the coins in the order shown.



- A. penny, quarter, nickel, dime
- B. nickel, penny, dime, quarter
- C. nickel, penny, quarter, dime
- D. penny, nickel, quarter, dime



- A. quarter, nickel, penny, dime
- B. dime, penny, quarter, nickel
- C. quarter, dime, penny, nickel
- D. dime, nickel, quarter, penny



- A. penny, dime, nickel, quarter
- B. nickel, penny, quarter, dime
- C. penny, nickel, dime, quarter
- D. nickel, quarter, penny, dime



- A. penny, quarter, dime, nickel
- B. nickel, dime, quarter, penny
- C. quarter, nickel, dime, penny
- D. nickel, penny, quarter, dime



- A. nickel, dime, quarter, penny
- B. penny, dime, nickel, quarter
- C. dime, quarter, nickel, penny
- D. penny, quarter, dime, nickel



- A. nickel, dime, penny, quarter
- B. nickel, quarter, dime, penny
- C. dime, quarter, penny, nickel
- D. nickel, dime, quarter, penny



- A. quarter, dime, nickel, penny
- B. dime, nickel, quarter, penny
- C. penny, dime, nickel, quarter
- D. penny, dime, quarter, nickel



- A. quarter, penny, nickel, dime
- B. quarter, dime, penny, nickel
- C. quarter, nickel, penny, dime
- D. penny, nickel, dime, quarter

Answers

1. **B**

2. **C**

3. **A**

4. **C**

5. **A**

6. **B**

7. **D**

8. **A**